


Area of a Rectangle


- ① Draw a rectangle that has length of 9 units and width of 4 units.



Equation: _____

Area = _____ square units


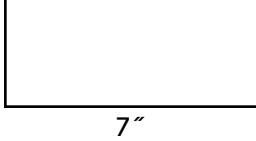
- ② Draw a rectangle that has a length of 7 units and a width of 8 units.



Equation: _____

Area = _____ square units

Use the formula $A = l * w$ to find the area of each rectangle.

<p>③ </p> <p>Equation: _____</p> <p>Area = _____ square feet</p>	<p>④ </p> <p>Equation: _____</p> <p>Area = _____ square inches</p>
---	---

- ⑤ Riley's dining room tabletop is 9 feet long and 6 feet wide. What is the area of the tabletop?

Equation: _____

Area = _____ square feet

Practice

⑥ $368 - 59 =$ _____

⑦ $194 - 147 =$ _____

⑧ _____ $= 1,729 - 623$