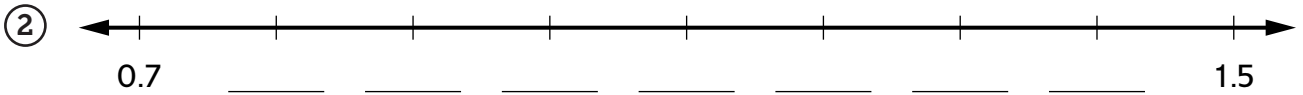
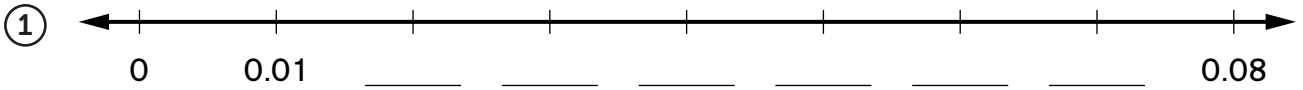


Practice with Decimals

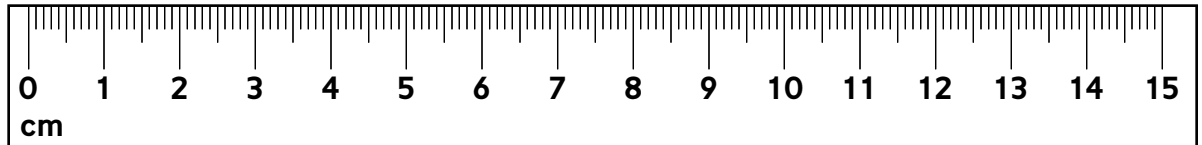
Fill in the missing numbers.



Follow these directions on the ruler below.



- ③ Make a dot at 7 cm and label it with the letter *A*.
- ④ Make a dot at 90 mm and label it with the letter *B*.
- ⑤ Make a dot at 0.13 m and label it with the letter *C*.
- ⑥ Make a dot at 0.06 m and label it with the letter *D*.



⑦ Write $<$, $>$, or $=$.

a. 1.2 ____ 0.12

b. 0.3 ____ 0.38

c. 0.80 ____ 0.08

⑧ Complete.

$1 \text{ cm} = 10 \text{ mm}$

$1 \text{ m} = 100 \text{ cm}$

cm	m
100	1
	5
1,000	
6,000	

cm	m
1	0.01
	0.03
	0.06
40	

Practice

⑨ $6,366 + 7,565 =$ _____

⑩ $3,238 + 29,784 =$ _____

⑪ $9,325 - 7,756 =$ _____

⑫ $14,805 - 2,927 =$ _____