

Comparing and Ordering Fractions

Home Link 3-7

NAME _____

DATE _____

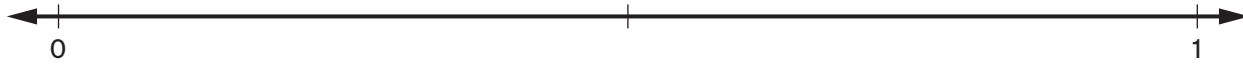
TIME _____

Write the fractions from smallest to largest, and then justify your conclusions by placing the numbers in the correct places on the number lines.



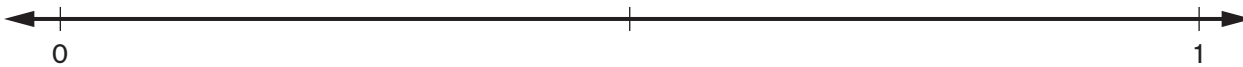
① $\frac{5}{6}, \frac{2}{6}, \frac{4}{6}$

smallest **largest**



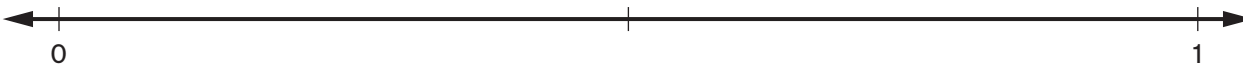
② $\frac{3}{5}, \frac{9}{10}, \frac{1}{4}, \frac{5}{12}$

smallest **largest**



③ $\frac{7}{12}, \frac{1}{2}, \frac{2}{3}, \frac{4}{10}, \frac{1}{6}$

smallest **largest**



Practice

④ _____ = 5,494 + 3,769

⑤ 5,853 + 4,268 = _____

⑥ _____ = 8,210 - 6,654

⑦ 7,235 - 5,906 = _____