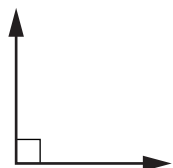


Finding Angle Measures

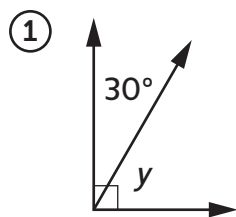
Find the unknown angle measures in Problems 1–6. Do *not* use a protractor.



A **right angle** measures 90° .

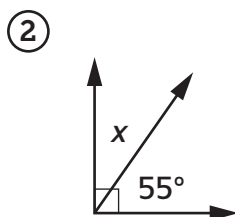


A **straight angle** measures 180° .



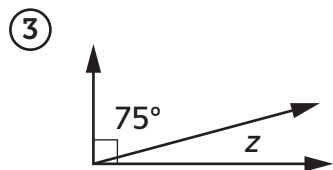
Equation with unknown: _____

Answer: _____



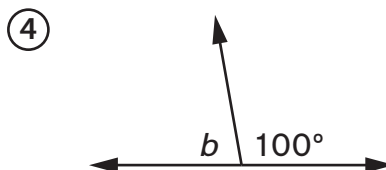
Equation with unknown: _____

Answer: _____



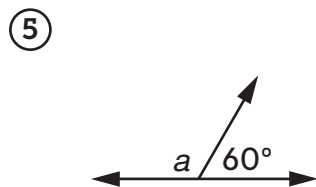
Equation with unknown: _____

Answer: _____



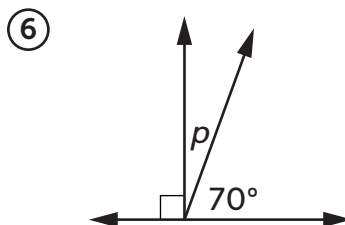
Equation with unknown: _____

Answer: _____



Equation with unknown: _____

Answer: _____



Equation with unknown: _____

Answer: _____

Practice

Order the fractions from smallest to largest.

⑦ $\frac{7}{10}, \frac{7}{8}, \frac{7}{12}, \frac{7}{9}$ _____

⑧ $\frac{5}{9}, \frac{99}{100}, \frac{1}{4}, \frac{9}{10}$ _____