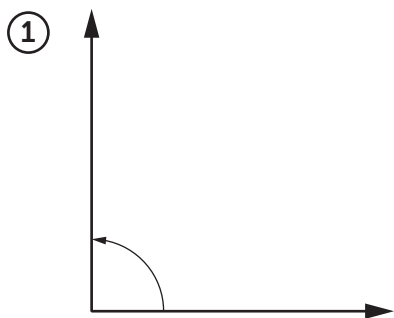
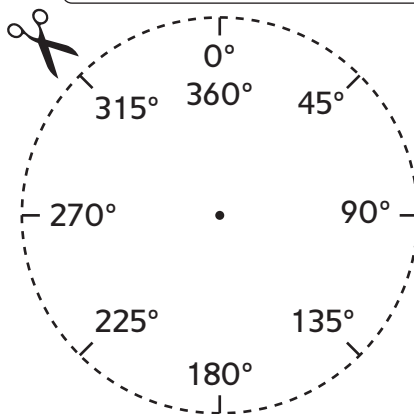


Measuring Angles

Cut out the angle measurer and use a pencil to poke a hole through the center.

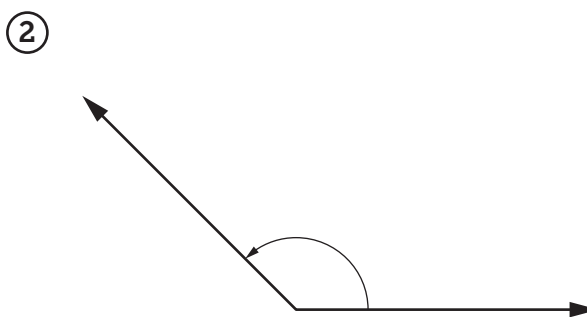
Label each angle *acute*, *right*, or *obtuse*.

Then use the angle measurer to measure each angle.



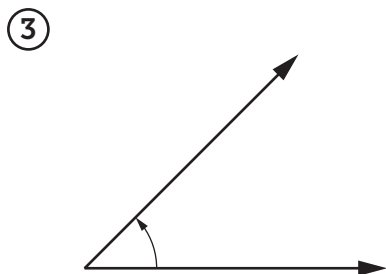
Type of angle: _____

Angle measure: _____



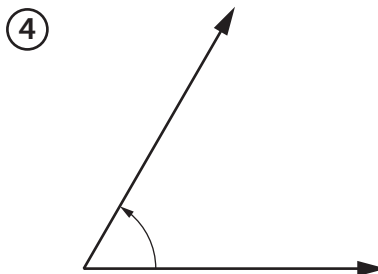
Type of angle: _____

Angle measure: _____



Type of angle: _____

Angle measure: _____



Type of angle: _____

Angle measure: _____

Practice

Multiply.

⑤

$$\begin{array}{r} 173 \\ * \quad 4 \\ \hline \end{array}$$

⑥

$$\begin{array}{r} 247 \\ * \quad 6 \\ \hline \end{array}$$

⑦

$$\begin{array}{r} 34 \\ * \quad 20 \\ \hline \end{array}$$